

ENGLISH:





Task- Watch the video carefully on These and Those
<https://youtu.be/fNsr-V2vx2c>

Task:- Read page 45 and do page 47 in grammar book.

11 **This, That, These, Those**



Let's Get Started

Read these sentences.

-  *This* little puppy goes to the market.
-  *That* little puppy stays at home.
-  *These* little puppies are playing with a ball.
-  *Those* little puppies are sitting in the sun.



We use **this** for a person, place or thing that is near us.
We use **this** to show one and **these** to show many.



Examples:

This is my book.  *These* are my books. 

We use **that** for a person, place or thing that is far from us.
We use **that** to show one and **those** to show many.

Examples:

That is my car.  

Those are my toys.  

Grammar Byte

This, that, these and those are sometimes used with naming words when we want to show something near or far away from us.

This violin is mine.

Those clothes are my sister's.

45

B Complete the sentences with **this**, **that**, **these** or **those**.

1. _____ (These/Those) children are eating ice creams.



2. _____ (This/That) puppy is playing.



3. _____ (These/Those) shirts are too small for me.



4. _____ (This/That) shop sells toys.



5. We like _____ (these/those) kites.



6. _____ (This/That) is my bicycle.



7. Meena wants _____ (these/those) books.



8. _____ (This/That) is an aeroplane.



MATHS:

Task-

Do page 30 in book.

Fill in the boxes.

$$\begin{array}{r} 1 \\ +1 \\ \hline \square \end{array}$$

$$\begin{array}{r} 5 \\ +1 \\ \hline \square \end{array}$$

$$\begin{array}{r} 3 \\ +1 \\ \hline \square \end{array}$$

$$\begin{array}{r} 2 \\ +5 \\ \hline \square \end{array}$$

$$\begin{array}{r} 4 \\ +5 \\ \hline \square \end{array}$$

$$\begin{array}{r} 8 \\ +1 \\ \hline \square \end{array}$$

$$\begin{array}{r} 3 \\ +5 \\ \hline \square \end{array}$$

$$\begin{array}{r} 6 \\ +3 \\ \hline \square \end{array}$$

$$\begin{array}{r} 3 \\ +2 \\ \hline \square \end{array}$$

$$\begin{array}{r} 1 \\ +4 \\ \hline \square \end{array}$$

$$\begin{array}{r} 2 \\ +4 \\ \hline \square \end{array}$$

$$\begin{array}{r} 4 \\ +4 \\ \hline \square \end{array}$$

$$\begin{array}{r} 2 \\ +6 \\ \hline \square \end{array}$$

$$\begin{array}{r} 3 \\ +6 \\ \hline \square \end{array}$$

$$\begin{array}{r} 3 \\ +4 \\ \hline \square \end{array}$$

$$\begin{array}{r} 1 \\ +3 \\ \hline \square \end{array}$$

$$\begin{array}{r} 6 \\ +1 \\ \hline \square \end{array}$$

$$\begin{array}{r} 2 \\ +7 \\ \hline \square \end{array}$$

$$\begin{array}{r} 5 \\ +3 \\ \hline \square \end{array}$$

$$\begin{array}{r} 4 \\ +3 \\ \hline \square \end{array}$$

$$\begin{array}{r} 5 \\ +4 \\ \hline \square \end{array}$$

$$\begin{array}{r} 1 \\ +6 \\ \hline \square \end{array}$$

$$\begin{array}{r} 5 \\ +2 \\ \hline \square \end{array}$$

$$\begin{array}{r} 3 \\ +3 \\ \hline \square \end{array}$$

$$\begin{array}{r} 7 \\ +1 \\ \hline \square \end{array}$$

$$\begin{array}{r} 7 \\ +2 \\ \hline \square \end{array}$$

$$\begin{array}{r} 2 \\ +1 \\ \hline \square \end{array}$$

$$\begin{array}{r} 1 \\ +5 \\ \hline \square \end{array}$$

$$\begin{array}{r} 1 \\ +2 \\ \hline \square \end{array}$$

$$\begin{array}{r} 1 \\ +7 \\ \hline \square \end{array}$$



Think!

Shakun rolled a ludo dice.

The dice fell like this.

Can you tell the sum of the three numbers you cannot see?



HINDI:

Watch the video on " संज्ञा "

<https://youtu.be/tHDwnLc3bV0>

Task –


Read poem on page 38 from book and find out 5 naming words (□ □ □ □ □) and write them in notebook.

गीत गाओ

मकड़ी रानी

मकड़ी रानी, मकड़ी रानी
बतलाओ तो प्रश्न हमारा
कैसे तुमने जाल बुना है
इतना सुंदर इतना प्यारा।
जिससे जाल बुना वह धागा
भला कहाँ से लाती हो
बुननेवाली जो मशीन है
वह भी कहाँ छिपाती हो ?
एक विनती तुमसे मेरी
है छोटी-सी सुनो ज़रा
मैं पतंग का धागा दे दूँ
मेरे कपड़े बुनो ज़रा।

— लक्ष्मी शंकर वाजपेयी



संकेत : कविता गाने और आनंद लेने के लिए है। बच्चों को मकड़ी का जाला अवश्य दिखाएँ। कविता पर मुन्डरें।

U.O.I :

Watch the video carefully on materials.

<https://youtu.be/P3k2NklpXTA>

Task-

Write names of materials used to build different types of houses (Hut, Bungalow, House boat, Igloo Caravan, Stilt house, Tent) in notebook.

Art :

Decorate the Rakhi card with the help of reference image given below.



PE :

Watch the video carefully

<https://youtu.be/AAN5xRHdWTE>

Task-Do the given summative task

Where we are in place & time
Summative Assessment

Identify and match the indoor games with its characteristics given below:-


1



A



2



B



3



C



4



D



5



E



6



F



7



G



8



H



Rubrics

- 4 – Identifies all the indoor games and its characteristics correctly.
- 3 – Identifies most of the indoor games and its characteristics correctly.
- 2 – Identifies few of indoor games and its characteristics correctly.
- 1 – Identifies indoor games and its characteristics with help.

Dance :

Do the given summative task. (Submission date 25-7-20)

- Task identify the pictures and pick its correct name form the help box and write on the blanks:-

Bhangra, Ghoomar, Dandiya, Dumhal,
Lavani, Bihu, Nati, Kaikotti- kali



3.



4.



5.



6.



7.





8.
